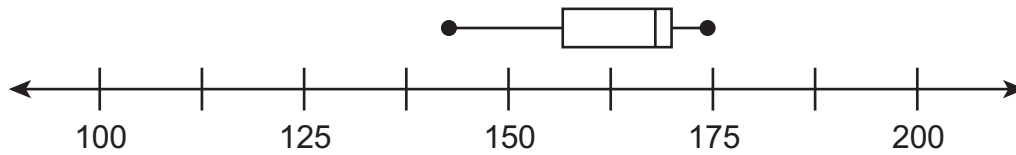


1. Shawna recorded the weights of 12 adults in her extended family. The weights are shown in the list below.

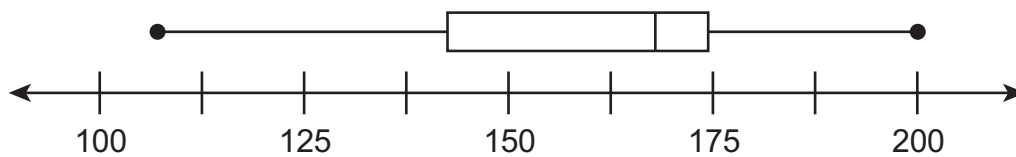
107 122 137 148 156 167 169 170 174 175 192 200

Which box-and-whiskers plot **best** represents the weights Shawna recorded?

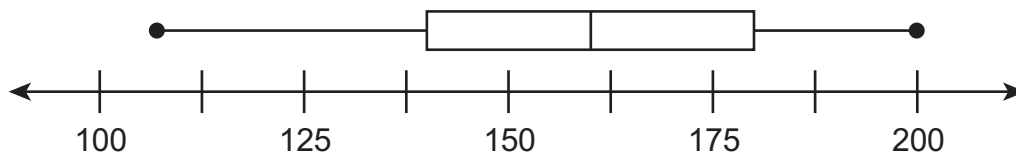
A.



B.



C.



D.

